

Online Activities

Numberblocks - Double trouble

<https://www.youtube.com/watch?v=kr3F3MjhDEw>

Adding doubles

<https://uk.ixl.com/math/reception/add-doubles-sums-up-to-10>

<https://www.ictgames.com/mobilePage/archeryDoubles/index.html>

Songs

Counting backwards

https://www.youtube.com/watch?v=srPkt4k_O8

https://www.youtube.com/watch?v=ShqXL-zfLxY&list=RDQM4rtE9ZNbuc&start_radio=1

Doubles song

<https://www.youtube.com/watch?v=NDqbCfplYrg>

Counting in 2's

https://www.youtube.com/watch?v=hae10bsW_CM

<https://www.youtube.com/watch?v=G2iStjfHxrk>

Counting in 5's

<https://www.youtube.com/watch?v=uDSWMjtMff4>

Counting to 100













<https://www.youtube.com/watch?v=0TgLtF3PMOc>

<https://www.youtube.com/watch?v=e0dJWfQHF8Y>

<https://www.youtube.com/watch?v=CyYh1raLGBs>


Can you add all the doubles to double 12? Draw the correct number of spots on each domino and then add them altogether. The first one is done for you.

DOMINO ADDITION

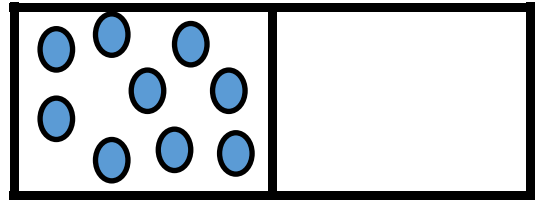
 $1 + 1 = 2$	 $_ + _ = _$	 $_ + _ = _$
 $_ + _ = _$	 $_ + _ = _$	 $_ + _ = _$
 $_ + _ = _$	 $_ + _ = _$	 $_ + _ = _$
 $_ + _ = _$	 $_ + _ = _$	 $_ + _ = _$

1	2	3	4	5	6	7	8	9	10
11	12	13	14	15	16	17	19	19	20
21	22	23	24	25	26	27	28	29	30


Can you complete the double number sentences?



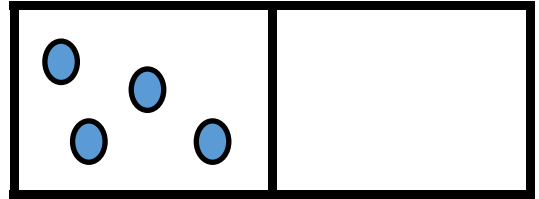
double ____ is ____



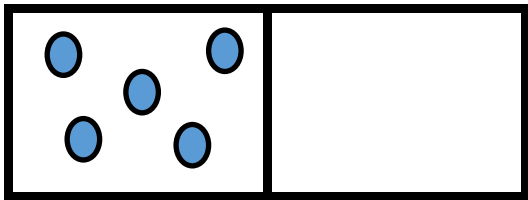
double ____ is ____



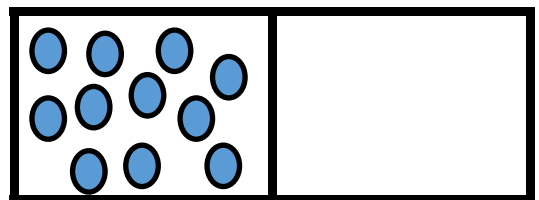
double ____ is ____



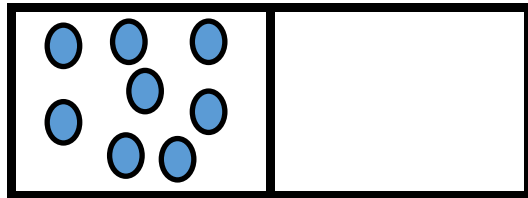
double ____ is ____



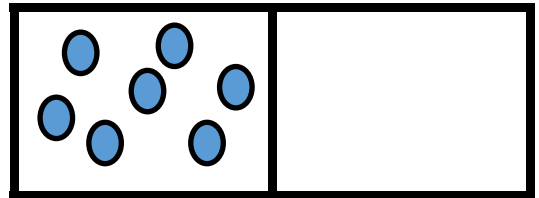
double ____ is ____



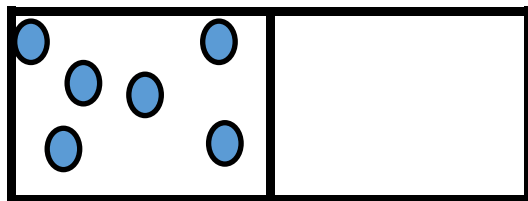
double ____ is ____



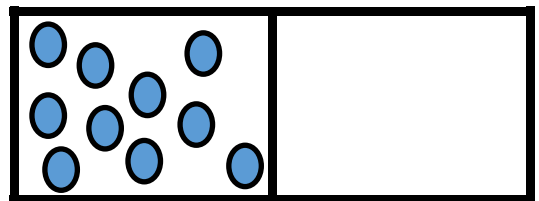
double ____ is ____



double ____ is ____



double ____ is ____



double ____ is ____

1	2	3	4	5	6	7	8	9	10
11	12	13	14	15	16	17	19	19	20
21	22	23	24	25	26	27	28	29	30